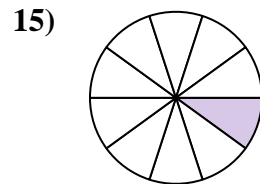
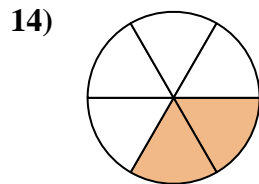
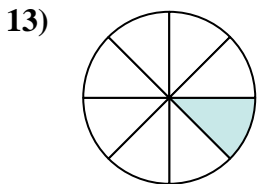
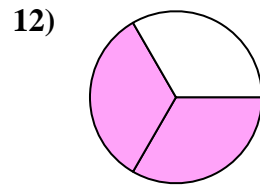
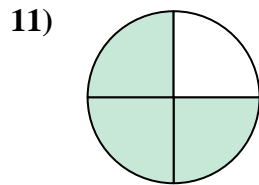
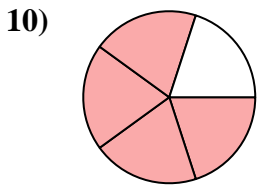
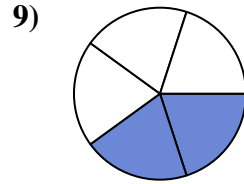
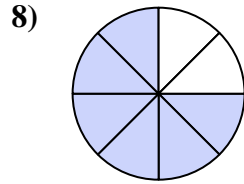
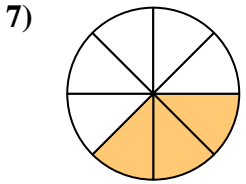
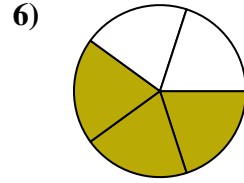
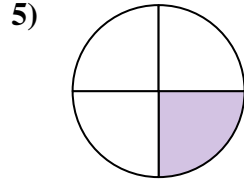
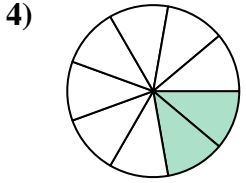
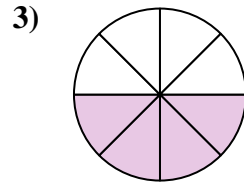
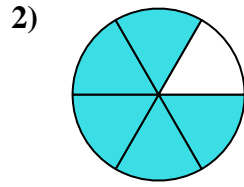
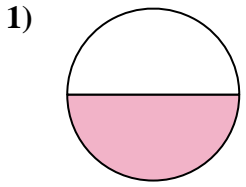




Find the angle (in degrees) of the shaded portion of the circle.

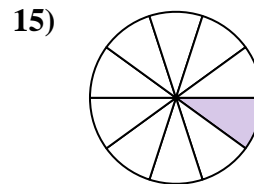
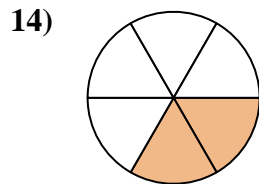
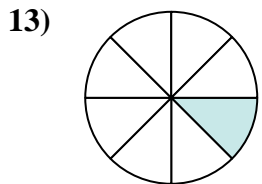
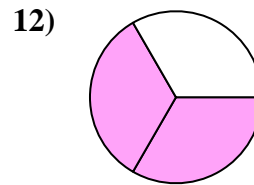
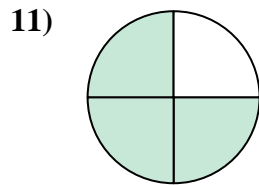
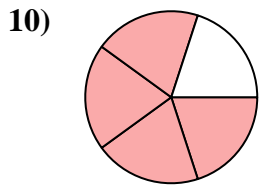
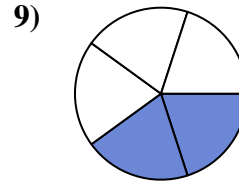
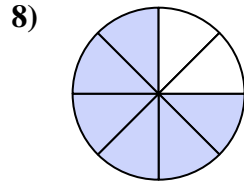
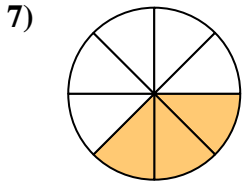
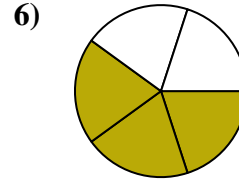
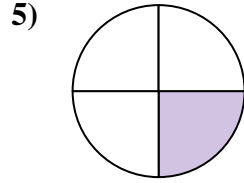
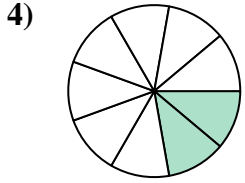
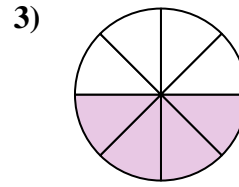
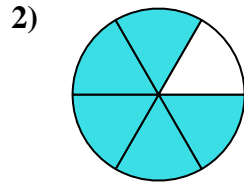
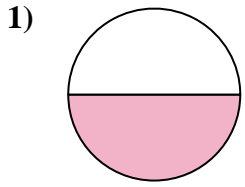
Answers



1. _____
2. _____
3. _____
4. _____
5. _____
6. _____
7. _____
8. _____
9. _____
10. _____
11. _____
12. _____
13. _____
14. _____
15. _____



Find the angle (in degrees) of the shaded portion of the circle.



Answers

1. 180

2. 300

3. 180

4. 80

5. 90

6. 216

7. 135

8. 270

9. 144

10. 288

11. 270

12. 240

13. 45

14. 120

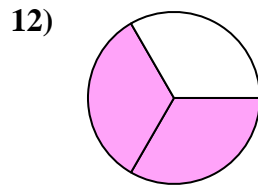
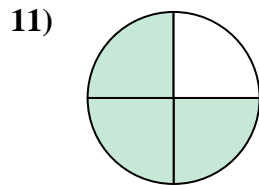
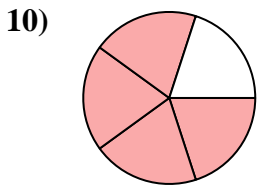
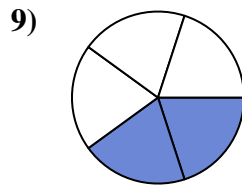
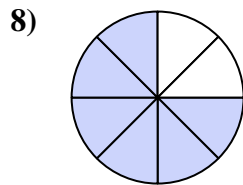
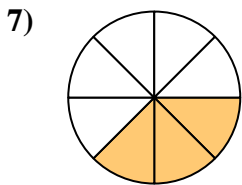
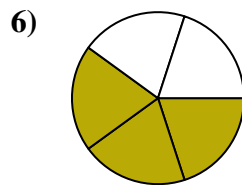
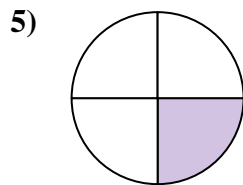
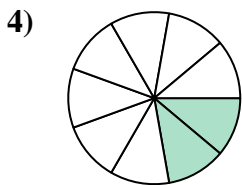
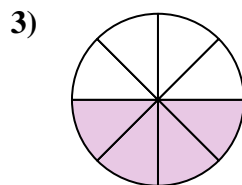
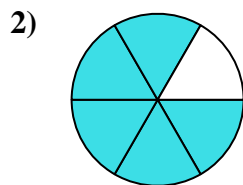
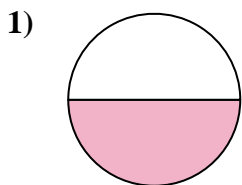
15. 36



Find the angle (in degrees) of the shaded portion of the circle.

Answers

| | | | | |
|-----|-----|-----|-----|-----|
| 270 | 300 | 80 | 135 | 90 |
| 216 | 144 | 240 | 288 | 270 |
| 180 | 180 | | | |



1. _____
2. _____
3. _____
4. _____
5. _____
6. _____
7. _____
8. _____
9. _____
10. _____
11. _____
12. _____